

National Exams May 2017

98-Ind-A5, Quality Planning, Control and Assurance

Notes:

1. If doubt exists as to the interpretation of any question, the candidate is urged to submit with the answer paper, a clear statement of any assumptions made.
2. This is a Closed Book examination.
3. Candidates may use one of two calculators, the Casio or Sharp approved models.
4. Candidates are permitted to bring into the examination room one aid sheet 8½"×11" written on both sides.
5. Any five questions constitute a complete paper. Only the first five questions as they appear in your answer book will be marked.
6. All questions are of equal value.
7. Relevant statistical tables are attached.

98-Ind-A5 May 2017

Question 1 (20 marks)

- 6 a) Discuss the traditional and Taguchi's definitions of quality and compare the Taguchi's loss function with the traditional loss function. Explain the relation between quality and profit and quality and productivity of a company.
- 7 b) How does the concurrent engineering contribute to the goal of lean manufacturing and quality improvement? What is the role of the Malcolm Baldrige National Quality Award? How is it different from quality certification? What is ISO/TS16949?
- 7 c) Describe briefly the four quality cost categories. In a successful quality improvement effort, which quality costs should decrease in the shorter and longer terms and why? Explain six sigma quality and the DMAIC methodology.

Question 2 (20 marks)

- 7 a) Describe the two types of variation in production processes. When is a process in statistical control? Can the traditional control charts be applied to control the processes exhibiting natural trends and if so, how? Show brief examples.
What is a run length, average run length and the average time to signal? Explain the effect of the sample size on the average run length.
- 4 b) \bar{X} and R control charts are maintained on the tensile strength of a metal fastener. After analyzing 40 samples of size $n=5$, we obtained
- $$\sum_{i=1}^{40} \bar{x}_i = 18,740 \text{ and } \sum_{i=1}^{40} R_i = 680$$
- Find the control limits for both charts and estimate the in-control process parameters. What assumptions are you making?
- 9 c) Consider the problem in b) and assume that the specifications on the tensile strength are 470 ± 25 . Estimate C_p, C_{pk} , and the process fraction nonconforming. To control future production, design the \bar{X} chart such that the $ARL \leq 5$ when the process mean shifts from μ_0 to $\mu_0 + 1.2\sigma$ (μ_0 and σ are the in-control process parameter estimates obtained in b)). Find the sample size and the control limits for this chart.

Question 3 (20 marks)

- 6 a) Explain the difference between an \bar{X} chart and a tabular CUSUM chart. Which of these two charts is more effective to detect small shifts in the process mean and why? EWMA chart is frequently used in industry for both EPC (Engineering Process Control) and SPC. Explain the rationale for using

98-Ind-A5 May 2017

EWMA chart for both types of control.

- 7 b) Samples of $n = 6$ units are taken from a process every hour. The \bar{X} and S values for a particular quality characteristic are calculated. After 20 samples have been collected, we obtained $\bar{\bar{X}} = 40$ and $\bar{\bar{S}} = 5.26$. Find the 3 sigma control limits for both \bar{X} and S charts. Estimate the process mean and standard deviation. If the process mean shifts to 48, what is the $P(RL \geq 10)$ for the \bar{X} chart?
- 7 c) Consider the data in 3b). To control future production, find the minimum sample size n and the control limits for the \bar{X} chart, such that when the process mean shifts from the in-control value obtained in 3b) to 45, the $P(RL \geq 10)$ is less than or equal to 0.2.

Question 4 (20 marks)

- 5 a) Draw a typical product life cycle curve and explain the three phases in the product failure rate evolution over time.
Which probability distributions can be used to model the three phases?
- 5 b) Provide the definitions of the reliability function, failure rate, and the mean residual time and show their formulas for the exponential distribution. Explain the meaning of the memoryless property of the exponential.
- 10 c) The specimens of a new electric insulation are life tested. The failure times in hours are as follows:
305, 470, 960, 1150, 185, 520, 615, 720, 655, 885.
Plot the data on the attached Weibull paper and estimate the shape parameter, the characteristic life and the mean time to failure.

Question 5 (20 marks)

- 6 a) Explain briefly what these charts are used for: p chart, np chart, c chart, u chart, and a demerit chart.
- 6 b) Assume that for a u -chart, the lower control limit is zero and the number of nonconformities in a sample is zero. When would you stop the process and search for an assignable cause and when you would not? Explain.
- 8 c) The number of workmanship nonconformities observed in the final inspection of disk-drive assemblies has been tabulated as shown below. One inspection unit is defined as two assemblies. Set-up the appropriate control chart with 3 sigma limits. Revise, if necessary. Estimate the in-control mean number of nonconformities per assembly.

Day	1	2	3	4	5	6	7	8	9	10
No. of assemblies inspected	4	6	4	8	4	2	6	8	4	8
Total No. of nonconformities	15	40	18	50	36	28	42	52	12	60

Question 6 (20 marks)

- 5 a) Explain the importance of randomization in a designed experiment. What is the purpose of considering blocking and testing the significance of a block effect in a real experiment? Discuss the advantages and disadvantages of design fractionation. What is the design resolution?
- 8 b) To find a lower-pollution synthetic fuel, researchers are experimenting with three different factors, each controlled at two levels, for the processing of such fuel. The measured levels of the undesirable emission of the fuel are shown in the table below for two replications of each treatment.

Treatment	Degree of Undesirable Emission Level in ppm	
(1)	32	27
a	20	24
b	40	35
c	30	22
ab	42	41
ac	56	46
bc	58	44
abc	24	21

Find the estimates of the main effects and the interaction effects.

- 7 c) Identify significant effects. Formulate and test the appropriate hypotheses at 10% significance level. What combination of factor levels results in the lowest mean undesirable emission level?

Appendix VI Factors for Constructing Variables Control Charts

Observations in Sample, <i>n</i>	Chart for Standard Deviations						Chart for Ranges									
	Chart for Averages			Chart for Center Line			Factors for Center Line			Factors for Control Limits						
	<i>A</i>	<i>A</i> ₂	<i>A</i> ₃	<i>c</i> ₄	<i>1/c</i> ₄	<i>E</i> ₃	<i>B</i> ₄	<i>B</i> ₅	<i>B</i> ₆	<i>d</i> ₂	<i>1/d</i> ₂	<i>d</i> ₃	<i>D</i> ₁	<i>D</i> ₂	<i>D</i> ₃	<i>D</i> ₄
2	2.121	1.880	2.659	0.7979	1.2533	0	3.267	0	2.606	1.128	0.8865	0.853	0	3.686	0	3.267
3	1.732	1.023	1.954	0.8862	1.1284	0	2.568	0	2.276	1.693	0.5907	0.888	0	4.358	0	2.575
4	1.500	0.729	1.628	0.9213	1.0854	0	2.266	0	2.088	2.059	0.4857	0.880	0	4.698	0	2.282
5	1.342	0.577	1.427	0.9400	1.0638	0	2.089	0	1.964	2.326	0.4299	0.864	0	4.918	0	2.115
6	1.225	0.483	1.287	0.9515	1.0510	0.030	1.970	0.029	1.874	2.534	0.3946	0.848	0	5.078	0	2.004
7	1.134	0.419	1.182	0.9594	1.0423	0.118	1.882	0.113	1.806	2.704	0.3698	0.833	0.204	5.204	0.076	1.924
8	1.061	0.373	1.099	0.9650	1.0363	0.185	1.815	0.179	1.751	2.847	0.3512	0.820	0.388	5.306	0.136	1.864
9	1.000	0.337	1.032	0.9693	1.0317	0.239	1.761	0.232	1.707	2.970	0.3367	0.808	0.547	5.393	0.184	1.816
10	0.949	0.308	0.975	0.9727	1.0281	0.284	1.716	0.276	1.669	3.078	0.3249	0.797	0.687	5.469	0.223	1.777
11	0.905	0.285	0.927	0.9754	1.0252	0.321	1.679	0.313	1.637	3.173	0.3152	0.787	0.811	5.535	0.256	1.744
12	0.866	0.266	0.886	0.9776	1.0229	0.354	1.646	0.346	1.610	3.258	0.3069	0.778	0.922	5.594	0.283	1.717
13	0.832	0.249	0.850	0.9794	1.0210	0.382	1.618	0.374	1.585	3.336	0.2998	0.770	1.025	5.647	0.307	1.693
14	0.802	0.235	0.817	0.9810	1.0194	0.406	1.594	0.399	1.563	3.407	0.2935	0.763	1.118	5.696	0.328	1.672
15	0.775	0.223	0.789	0.9823	1.0180	0.428	1.572	0.421	1.544	3.472	0.2880	0.756	1.203	5.741	0.347	1.653
16	0.750	0.212	0.763	0.9835	1.0168	0.448	1.552	0.440	1.526	3.532	0.2831	0.750	1.282	5.782	0.363	1.637
17	0.728	0.203	0.739	0.9845	1.0157	0.466	1.534	0.458	1.511	3.588	0.2787	0.744	1.356	5.820	0.378	1.622
18	0.707	0.194	0.718	0.9854	1.0148	0.482	1.518	0.475	1.496	3.640	0.2747	0.739	1.424	5.856	0.391	1.608
19	0.688	0.187	0.698	0.9862	1.0140	0.497	1.503	0.490	1.483	3.689	0.2711	0.734	1.487	5.891	0.403	1.597
20	0.671	0.180	0.680	0.9869	1.0133	0.510	1.490	0.504	1.470	3.735	0.2677	0.729	1.549	5.921	0.415	1.585
21	0.655	0.173	0.663	0.9876	1.0126	0.523	1.477	0.516	1.459	3.778	0.2647	0.724	1.605	5.951	0.425	1.575
22	0.640	0.167	0.647	0.9882	1.0119	0.534	1.466	0.528	1.448	3.819	0.2618	0.720	1.659	5.979	0.434	1.566
23	0.626	0.162	0.633	0.9887	1.0114	0.545	1.455	0.539	1.438	3.858	0.2592	0.716	1.710	6.006	0.443	1.557
24	0.612	0.157	0.619	0.9892	1.0109	0.555	1.445	0.549	1.429	3.895	0.2567	0.712	1.759	6.031	0.451	1.548
25	0.600	0.153	0.606	0.9896	1.0105	0.565	1.435	0.559	1.420	3.931	0.2544	0.708	1.806	6.056	0.459	1.541

For *n* > 25

$$A = \frac{3}{\sqrt{n}}, \quad A_3 = \frac{3}{c_4 \sqrt{n}}, \quad c_4 = \frac{4(n-1)}{4n-3}$$

$$B_3 = 1 - \frac{3}{c_4 \sqrt{2(n-1)}}, \quad B_4 = 1 + \frac{3}{c_4 \sqrt{2(n-1)}}$$

$$B_5 = c_4 - \frac{3}{\sqrt{2(n-1)}}, \quad B_6 = c_4 + \frac{3}{\sqrt{2(n-1)}}$$

Appendix II Cumulative Standard Normal Distribution

$$\Phi(z) = \int_{-\infty}^z \frac{1}{\sqrt{2\pi}} e^{-u^2/2} du$$



z	0.00	0.01	0.02	0.03	0.04	z
0.0	0.50000	0.50399	0.50798	0.51197	0.51595	0.0
0.1	0.53983	0.54379	0.54776	0.55172	0.55567	0.1
0.2	0.57926	0.58317	0.58706	0.59095	0.59483	0.2
0.3	0.61791	0.62172	0.62551	0.62930	0.63307	0.3
0.4	0.65542	0.65910	0.66276	0.66640	0.67003	0.4
0.5	0.69146	0.69497	0.69847	0.70194	0.70540	0.5
0.6	0.72575	0.72907	0.73237	0.73565	0.73891	0.6
0.7	0.75803	0.76115	0.76424	0.76730	0.77035	0.7
0.8	0.78814	0.79103	0.79389	0.79673	0.79954	0.8
0.9	0.81594	0.81859	0.82121	0.82381	0.82639	0.9
1.0	0.84134	0.84375	0.84613	0.84849	0.85083	1.0
1.1	0.86433	0.86650	0.86864	0.87076	0.87285	1.1
1.2	0.88493	0.88686	0.88877	0.89065	0.89251	1.2
1.3	0.90320	0.90490	0.90658	0.90824	0.90988	1.3
1.4	0.91924	0.92073	0.92219	0.92364	0.92506	1.4
1.5	0.93319	0.93448	0.93574	0.93699	0.93822	1.5
1.6	0.94520	0.94630	0.94738	0.94845	0.94950	1.6
1.7	0.95543	0.95637	0.95728	0.95818	0.95907	1.7
1.8	0.96407	0.96485	0.96562	0.96637	0.96711	1.8
1.9	0.97128	0.97193	0.97257	0.97320	0.97381	1.9
2.0	0.97725	0.97778	0.97831	0.97882	0.97932	2.0
2.1	0.98214	0.98257	0.98300	0.98341	0.98382	2.1
2.2	0.98610	0.98645	0.98679	0.98713	0.98745	2.2
2.3	0.98928	0.98956	0.98983	0.99010	0.99036	2.3
2.4	0.99180	0.99202	0.99224	0.99245	0.99266	2.4
2.5	0.99379	0.99396	0.99413	0.99430	0.99446	2.5
2.6	0.99534	0.99547	0.99560	0.99573	0.99585	2.6
2.7	0.99653	0.99664	0.99674	0.99683	0.99693	2.7
2.8	0.99744	0.99752	0.99760	0.99767	0.99774	2.8
2.9	0.99813	0.99819	0.99825	0.99831	0.99836	2.9
3.0	0.99865	0.99869	0.99874	0.99878	0.99882	3.0
3.1	0.99903	0.99906	0.99910	0.99913	0.99916	3.1
3.2	0.99931	0.99934	0.99936	0.99938	0.99940	3.2
3.3	0.99952	0.99953	0.99955	0.99957	0.99958	3.3
3.4	0.99966	0.99968	0.99969	0.99970	0.99971	3.4
3.5	0.99977	0.99978	0.99978	0.99979	0.99980	3.5
3.6	0.99984	0.99985	0.99985	0.99986	0.99986	3.6
3.7	0.99989	0.99990	0.99990	0.99990	0.99991	3.7
3.8	0.99993	0.99993	0.99993	0.99994	0.99994	3.8
3.9	0.99995	0.99995	0.99996	0.99996	0.99996	3.9



Appendix II (Continued)


$$\Phi(z) = \int_{-\infty}^z \frac{1}{\sqrt{2\pi}} e^{-u^2/2} du$$

z	0.05	0.06	0.07	0.08	0.09	z
0.0	0.51994	0.52392	0.52790	0.53188	0.53586	0.0
0.1	0.55962	0.56356	0.56749	0.57142	0.57534	0.1
0.2	0.59871	0.60257	0.60642	0.61026	0.61409	0.2
0.3	0.63683	0.64058	0.64431	0.64803	0.65173	0.3
0.4	0.67364	0.67724	0.68082	0.68438	0.68793	0.4
0.5	0.70884	0.71226	0.71566	0.71904	0.72240	0.5
0.6	0.74215	0.74537	0.74857	0.75175	0.75490	0.6
0.7	0.77337	0.77637	0.77935	0.78230	0.78523	0.7
0.8	0.80234	0.80510	0.80785	0.81057	0.81327	0.8
0.9	0.82894	0.83147	0.83397	0.83646	0.83891	0.9
1.0	0.85314	0.85543	0.85769	0.85993	0.86214	1.0
1.1	0.87493	0.87697	0.87900	0.88100	0.88297	1.1
1.2	0.89435	0.89616	0.89796	0.89973	0.90147	1.2
1.3	0.91149	0.91308	0.91465	0.91621	0.91773	1.3
1.4	0.92647	0.92785	0.92922	0.93056	0.93189	1.4
1.5	0.93943	0.94062	0.94179	0.94295	0.94408	1.5
1.6	0.95053	0.95154	0.95254	0.95352	0.95448	1.6
1.7	0.95994	0.96080	0.96164	0.96246	0.96327	1.7
1.8	0.96784	0.96856	0.96926	0.96995	0.97062	1.8
1.9	0.97441	0.97500	0.97558	0.97615	0.97670	1.9
2.0	0.97982	0.98030	0.98077	0.98124	0.98169	2.0
2.1	0.98422	0.98461	0.98500	0.98537	0.98574	2.1
2.2	0.98778	0.98809	0.98840	0.98870	0.98899	2.2
2.3	0.99061	0.99086	0.99111	0.99134	0.99158	2.3
2.4	0.99286	0.99305	0.99324	0.99343	0.99361	2.4
2.5	0.99461	0.99477	0.99492	0.99506	0.99520	2.5
2.6	0.99598	0.99609	0.99621	0.99632	0.99643	2.6
2.7	0.99702	0.99711	0.99720	0.99728	0.99736	2.7
2.8	0.99781	0.99788	0.99795	0.99801	0.99807	2.8
2.9	0.99841	0.99846	0.99851	0.99856	0.99861	2.9
3.0	0.99886	0.99889	0.99893	0.99897	0.99900	3.0
3.1	0.99918	0.99921	0.99924	0.99926	0.99929	3.1
3.2	0.99942	0.99944	0.99946	0.99948	0.99950	3.2
3.3	0.99960	0.99961	0.99962	0.99964	0.99965	3.3
3.4	0.99972	0.99973	0.99974	0.99975	0.99976	3.4
3.5	0.99981	0.99981	0.99982	0.99983	0.99983	3.5
3.6	0.99987	0.99987	0.99988	0.99988	0.99989	3.6
3.7	0.99991	0.99992	0.99992	0.99992	0.99992	3.7
3.8	0.99994	0.99994	0.99995	0.99995	0.99995	3.8
3.9	0.99996	0.99996	0.99996	0.99997	0.99997	3.9

WEIBULL PROBABILITY CHART

⊙ Estimation Point

Test Number	Article and Source	Sample Size	N
Date	Type of Test	Shape	$\hat{\beta}$
		Characteristic Life	$\hat{\eta}$
		Minimum Life	$\hat{\gamma}$



Available from: Campus Bookstore, Queen's University, Kingston, Ontario, Canada, K7L 3N6

APPENDIX V

Percentage Points of the F Distribution (Continued)

$\nu_1 \backslash \nu_2$	Degrees of freedom for the numerator (ν_1)																		
	1	2	3	4	5	6	7	8	9	10	12	15	20	24	30	40	60	120	∞
1	39.86	49.50	53.59	55.83	57.24	58.20	58.91	59.44	59.86	60.19	60.71	61.22	61.74	62.00	62.26	62.53	62.79	63.06	63.33
2	8.53	9.00	9.16	9.24	9.29	9.33	9.35	9.37	9.38	9.39	9.41	9.42	9.44	9.45	9.46	9.47	9.47	9.48	9.49
3	5.54	5.46	5.39	5.34	5.31	5.28	5.27	5.25	5.24	5.23	5.22	5.20	5.18	5.18	5.17	5.16	5.15	5.14	5.13
4	4.54	4.32	4.19	4.11	4.05	4.01	3.98	3.95	3.94	3.92	3.90	3.87	3.84	3.83	3.82	3.80	3.79	3.78	3.76
5	4.06	3.78	3.62	3.52	3.45	3.40	3.37	3.34	3.32	3.30	3.27	3.24	3.21	3.19	3.17	3.16	3.14	3.12	3.10
6	3.78	3.46	3.29	3.18	3.11	3.05	3.01	2.98	2.96	2.94	2.90	2.87	2.84	2.82	2.80	2.78	2.76	2.74	2.72
7	3.59	3.26	3.07	2.96	2.88	2.83	2.78	2.75	2.72	2.70	2.67	2.63	2.59	2.58	2.56	2.54	2.51	2.49	2.47
8	3.46	3.11	2.92	2.81	2.73	2.67	2.62	2.59	2.56	2.54	2.50	2.46	2.42	2.40	2.38	2.36	2.34	2.32	2.29
9	3.36	3.01	2.81	2.69	2.61	2.55	2.51	2.47	2.44	2.42	2.38	2.34	2.30	2.28	2.25	2.23	2.21	2.18	2.16
10	3.29	2.92	2.73	2.61	2.52	2.46	2.41	2.38	2.35	2.32	2.28	2.24	2.20	2.18	2.16	2.13	2.11	2.08	2.06
11	3.23	2.86	2.67	2.54	2.45	2.39	2.34	2.30	2.27	2.25	2.21	2.17	2.12	2.10	2.07	2.05	2.03	2.00	1.97
12	3.18	2.81	2.61	2.48	2.39	2.33	2.28	2.24	2.21	2.19	2.15	2.10	2.06	2.04	2.01	1.99	1.96	1.93	1.90
13	3.14	2.76	2.56	2.43	2.35	2.28	2.23	2.20	2.16	2.14	2.10	2.05	2.01	1.98	1.96	1.93	1.90	1.88	1.85
14	3.10	2.73	2.52	2.39	2.31	2.24	2.19	2.15	2.12	2.10	2.05	2.01	1.96	1.94	1.91	1.89	1.86	1.83	1.80
15	3.07	2.70	2.49	2.36	2.27	2.21	2.16	2.12	2.09	2.06	2.02	1.97	1.92	1.89	1.87	1.85	1.82	1.79	1.76
16	3.05	2.67	2.46	2.33	2.24	2.18	2.13	2.09	2.06	2.03	1.99	1.94	1.89	1.86	1.84	1.81	1.78	1.75	1.72
17	3.03	2.64	2.42	2.29	2.20	2.14	2.09	2.05	2.02	1.98	1.94	1.89	1.84	1.81	1.79	1.76	1.73	1.70	1.67
18	3.01	2.62	2.40	2.27	2.18	2.12	2.07	2.03	2.00	1.96	1.91	1.86	1.81	1.78	1.76	1.73	1.70	1.67	1.63
19	2.99	2.61	2.40	2.27	2.18	2.12	2.07	2.03	2.00	1.96	1.91	1.86	1.81	1.78	1.76	1.73	1.70	1.67	1.63
20	2.97	2.59	2.38	2.25	2.16	2.10	2.05	2.00	1.96	1.94	1.89	1.84	1.79	1.76	1.74	1.71	1.68	1.64	1.61
21	2.96	2.57	2.36	2.23	2.14	2.08	2.02	1.98	1.95	1.92	1.87	1.83	1.78	1.75	1.73	1.70	1.66	1.62	1.59
22	2.95	2.56	2.35	2.22	2.13	2.06	2.01	1.97	1.93	1.90	1.86	1.81	1.76	1.73	1.71	1.67	1.64	1.60	1.57
23	2.94	2.55	2.34	2.21	2.11	2.04	1.99	1.95	1.92	1.88	1.84	1.80	1.74	1.72	1.69	1.66	1.62	1.59	1.55
24	2.93	2.54	2.33	2.19	2.10	2.04	1.98	1.94	1.91	1.87	1.83	1.78	1.73	1.70	1.67	1.64	1.61	1.57	1.53
25	2.92	2.53	2.32	2.18	2.09	2.02	1.97	1.93	1.89	1.85	1.81	1.76	1.71	1.68	1.66	1.63	1.59	1.56	1.52
26	2.91	2.52	2.31	2.17	2.08	2.01	1.96	1.92	1.88	1.84	1.80	1.75	1.70	1.67	1.64	1.60	1.57	1.53	1.49
27	2.90	2.51	2.30	2.16	2.07	2.00	1.95	1.91	1.87	1.83	1.79	1.74	1.69	1.66	1.63	1.59	1.56	1.52	1.48
28	2.89	2.50	2.29	2.15	2.06	1.99	1.94	1.90	1.86	1.82	1.78	1.73	1.68	1.65	1.62	1.58	1.54	1.50	1.46
29	2.89	2.50	2.28	2.14	2.05	1.98	1.93	1.89	1.85	1.81	1.77	1.72	1.67	1.64	1.60	1.56	1.52	1.48	1.44
30	2.88	2.49	2.28	2.14	2.03	1.96	1.91	1.87	1.83	1.79	1.75	1.70	1.65	1.62	1.58	1.54	1.50	1.46	1.42
40	2.84	2.44	2.23	2.09	2.00	1.93	1.88	1.83	1.79	1.76	1.71	1.66	1.61	1.57	1.54	1.49	1.44	1.38	1.34
60	2.79	2.39	2.18	2.04	1.95	1.87	1.82	1.77	1.73	1.70	1.66	1.60	1.55	1.51	1.47	1.42	1.37	1.31	1.27
120	2.75	2.35	2.13	1.99	1.90	1.82	1.77	1.72	1.68	1.65	1.60	1.55	1.48	1.44	1.40	1.35	1.29	1.23	1.19
∞	2.71	2.30	2.08	1.94	1.85	1.77	1.72	1.67	1.63	1.60	1.55	1.49	1.42	1.38	1.34	1.30	1.24	1.17	1.00

$F_{0.10, \nu_1, \nu_2}$



Note: $F_{0.90, \nu_1, \nu_2} = 1/F_{0.10, \nu_2, \nu_1}$