

National Exams

98-Pet-B1, Well Logging and Formation Evaluation

3 hours duration

NOTES:

1. If doubt exists as to the interpretation of any question, the candidate is urged to submit with the answer paper, a clear statement of any assumptions made.
2. Candidates are also encouraged to make any reasonable assumption for the missing parameters (if any) and answer questions.
3. This is a CLOSED BOOK exam. Graphs, equations, and data are provided as attachments; however, not all of graphs and equations are necessarily need to be used for this exam. Graph papers are also provided in the attachments.

**Only A Casio or Sharp approved calculator models are permitted.**

4. This exam contains 11 questions. All questions will be marked.
5. Value of each question is shown.
6. Some questions require an answer in essay format. Clarity and organization of the answer are important.



Question 2:

With the help of two separate diagrams for the resistivity as a function of distance away from the wellbore, describe the invasion profile when i) transition and ii) annulus zones are observed. (5 pts)

Question 3:

List and explain the three types of Neutron detectors. (6 pts)

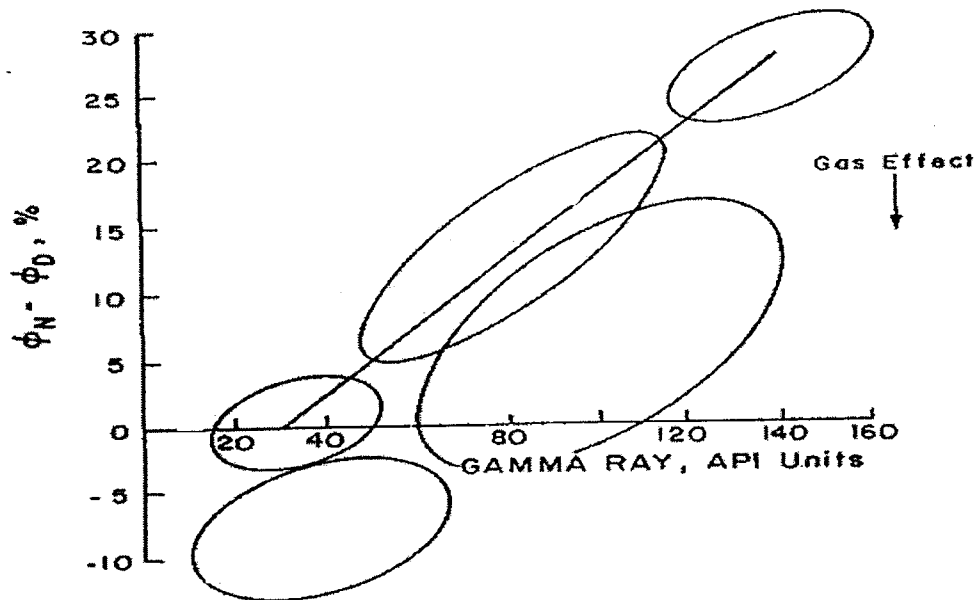
Question 4:

Calculate the  $SSP$  for a clean, predominantly NaCl water-bearing sand drilled with a fresh water-based mud (also predominantly NaCl). The formation temperature is 200 °F, and  $R_{mf}$  and  $R_w$  measured at 68 °F temperature are 0.31 and 0.054  $\Omega$ .m, respectively. (4 pts)



Question 7:

Below figure shows a crossplot of  $(\phi_N - \phi_D)$  vs. gamma ray for a specific log interval, as it can be seen on the figure, 5 different zones were observed and each zone is shown by an ellipse. Assume that the detected zones are: 1. Shaly gas-bearing formation, 2. Clean-gas bearing formation, 3. Shaly-liquid bearing formation, 4. Shale and 5. Clean liquid-bearing formation. Show each zone on the corresponding ellipse in below figure. (5 pts)



Question 8:

The following values were read from the induction and sonic logs recorded through a sand/shale section:

Zone	Conductivity	$\Delta t$ ( $\mu\text{sec}/\text{ft}$ )
1	400	95
2	150	96
3	370	83
4	520	85
5	50	58
6	140	76
7	130	67
8	100	80
9	100	55
10	200	69
11	150	90
12	1050	86
13	1500	91

- Prepare a Hingle plot using  $F=0.62/\phi^{2.15}$  (you may use the attached grid scale). (4 pts)
- Prepare a Pickett plot using  $\Delta t_{ma}=55.5 \mu\text{sec}/\text{ft}$ . (4 pts)
- Does the section analyzed contain lithologies other than sandstone? (2 pts)
- Determine  $R_w$  and  $\Delta t_{ma}$  from the Hingle plot. (4 pts)
- Determine  $R_w$  and  $m$  from the Pickett plot.  $F = \frac{1}{\phi^{2.1}}$  (4 pts)

*This page is left blank (intentionally). Please use it for Q.11 if necessary.*



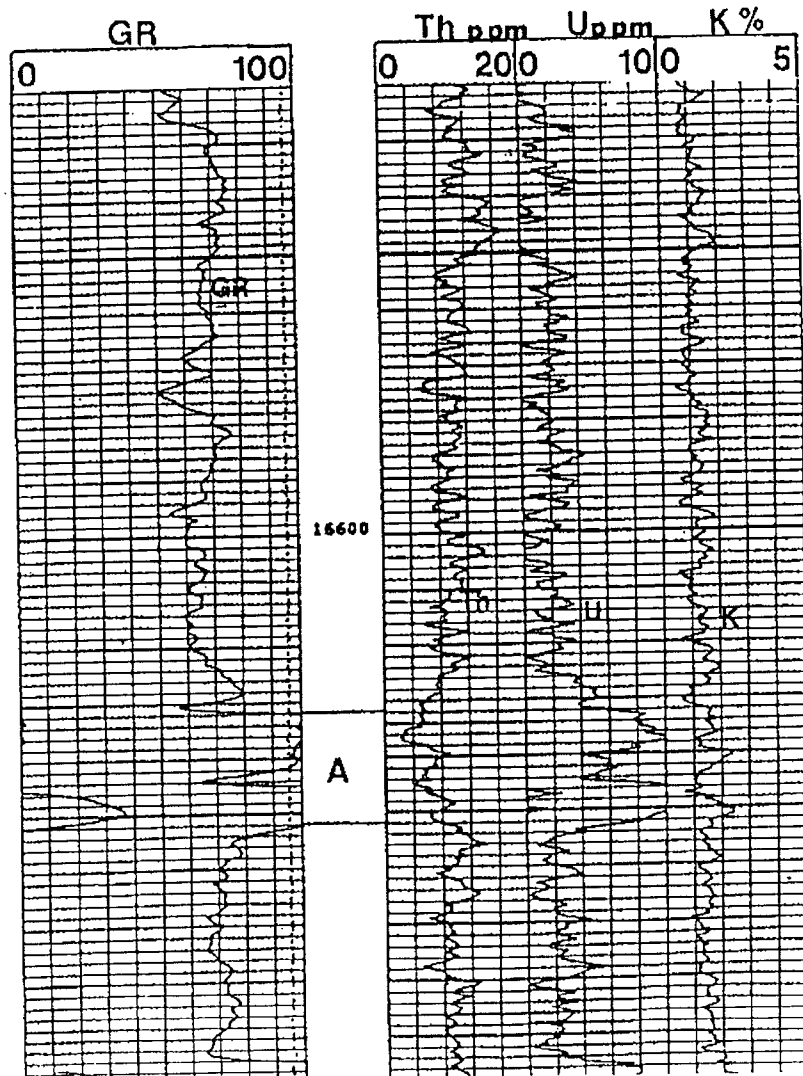
Question 9:

- a) The activity of 1 g of pure radium-226 is measured to be  $3.22 \times 10^{10}$  integrations/sec. Calculate the half-life time and decay constant of radium-226. (4 pts)
- b) There are  $18 \times 10^{14}$  radioactive nuclei of a certain kind present at time zero. After 150 days, there is  $5 \times 10^{14}$  left.
- i. What is the decay constant of these nuclei? (3 pts)
  - ii. What is the half-life? (2 pts)
  - iii. How many disintegrations per seconds are there initially and at 150 days? (3 pts)

Question 10:

Consider the following log which is obtained by Schlumberger device; calculate the shale index using the gamma ray and spectrometry log responses.

- Compare the results obtained and explain which value is more representative of the shale index. (6 Pts)
- Assume that the zone is  $0.7 \text{ g/cm}^3$  oil bearing limestone and drilled by an oil-based mud, if the residual oil saturation is 35%, calculate the apparent and true porosities for the zone of interest. (4 Pts)



*This page is left blank (intentionally). Please use it for Q.11 if necessary.*



*This page is left blank (intentionally). Please use it for Q.11 if necessary.*

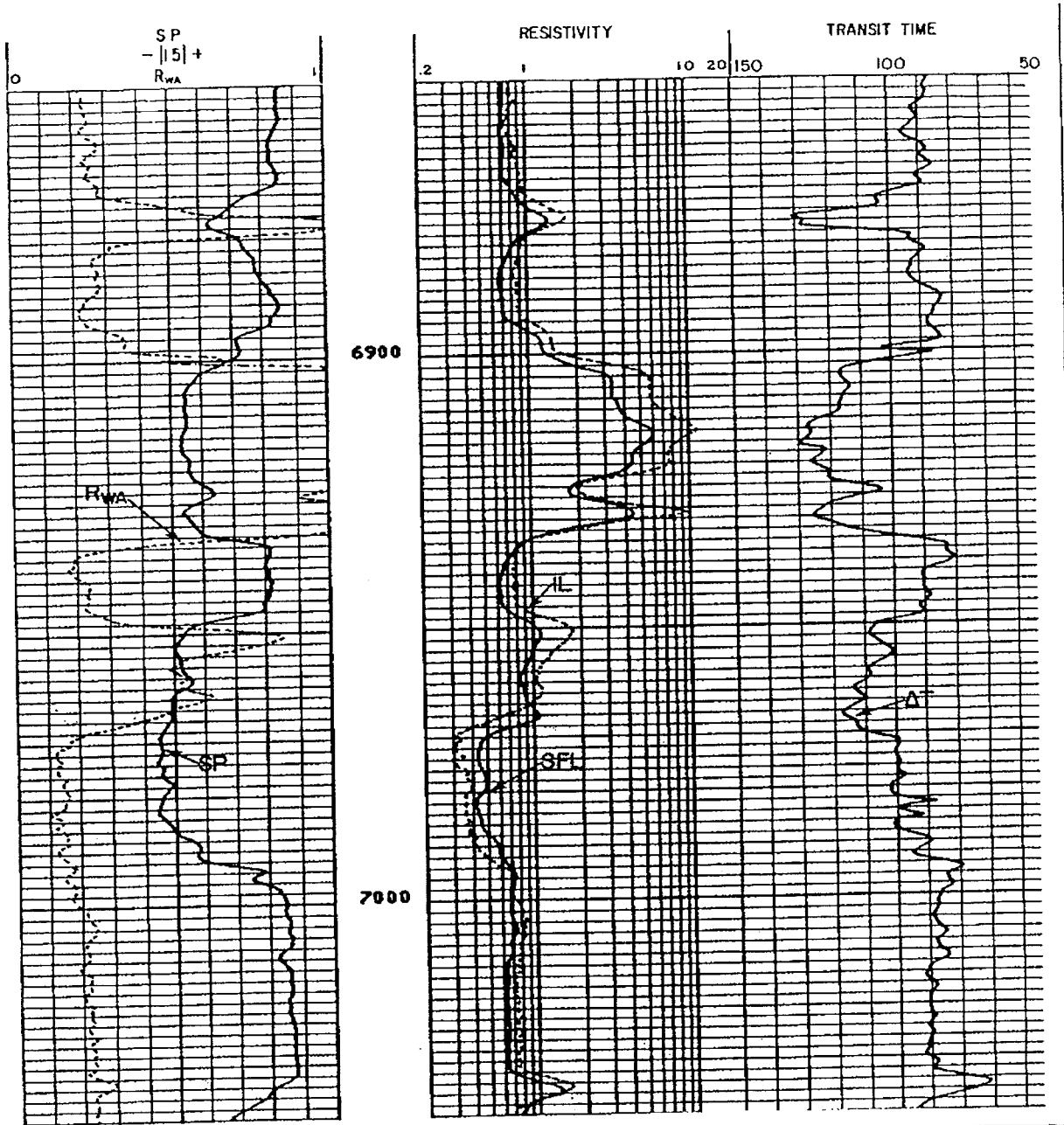


FIG. 11.26—ISF/sonic log of Problem 11.3 (courtesy Schlumberger).

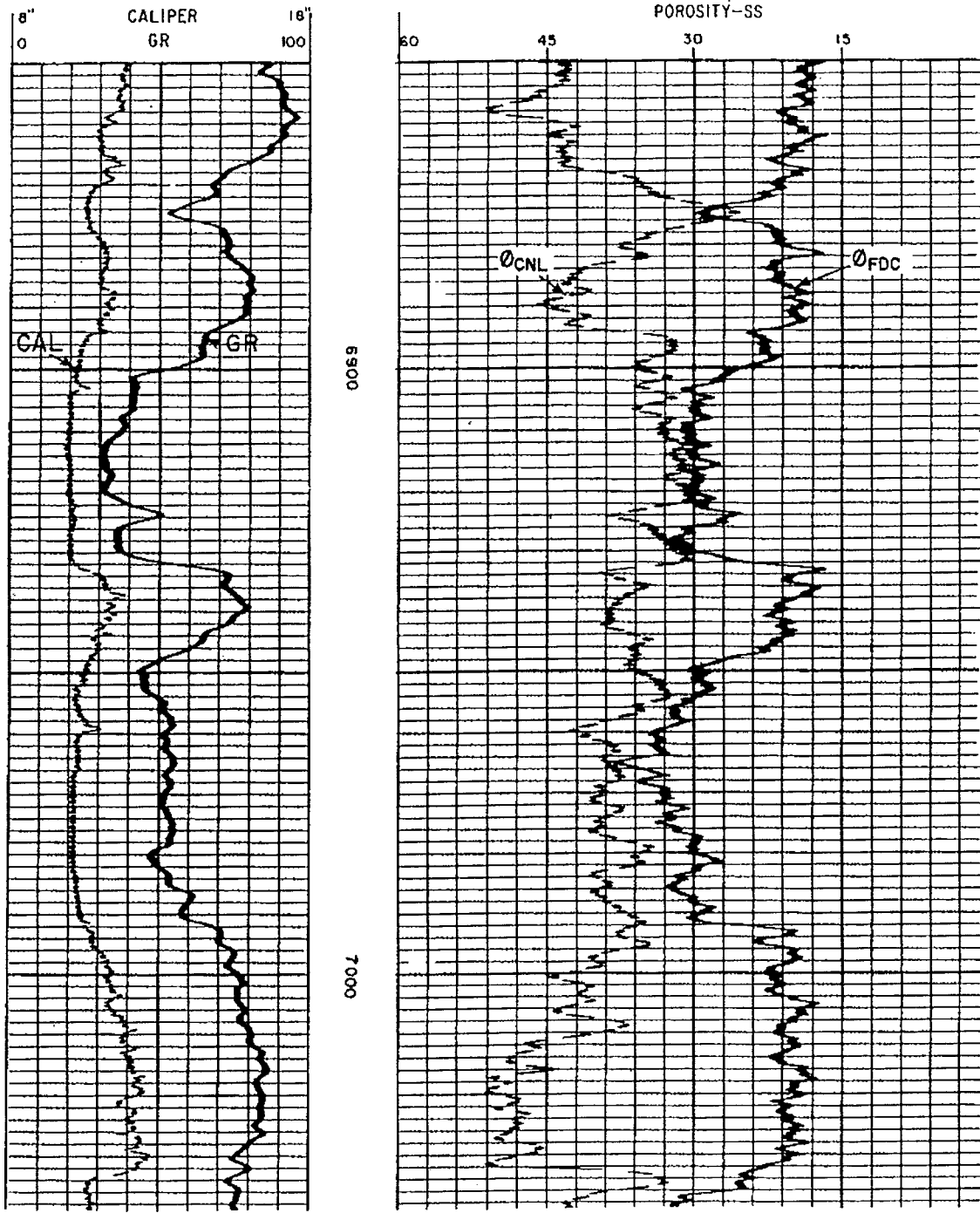


Fig. 11.27—CNL/FDC log of Problem 11.3 (courtesy Schlumberger).

Attachment:

$$R_2 = R_1 \frac{T_1 + 6.77}{T_2 + 6.77}$$

$$f_w = \frac{1}{1 + \frac{k_{ro}\mu_w}{k_{rw}\mu_o}} \quad R_{mp} = \frac{FR_w}{(S_{cv})^n}$$

$$S_w = \left( \frac{0.81R_w}{\phi^2 R_l} \right)^{1/2} - \left( \frac{V_{sh}R_w}{0.4\phi R_{sh}} \right)$$

$$F = \frac{0.62}{\phi^{2.15}}$$

$$R_w = \frac{R_o}{F}$$

$$N_R = 7758 \frac{AF_R}{B_o} \sum_{i=1}^n h_i \phi_i (S_o)_i$$

$$(\phi_D)_{sh} = \left[ \frac{\rho_{ma} - \rho_{sh}}{\rho_{ma} - \rho_f} \right]$$

$$\phi = \left[ \frac{(\Delta t - \Delta t_{ma})}{(\Delta t_f - \Delta t_{ma})} \right]$$

$$I_R = \frac{R_t}{R_o} = \frac{7.5}{0.752}$$

$$S_w = \left( \frac{R_o}{R_l} \right)^{1/2} \quad S_o = 1 - S_w$$

$$N = \frac{6.023 \times 10^{23}}{Z} \square mass$$

$$a = NC_d$$

$$t_{1/2} = 0.693 / C_d$$

$$\square = 1.443 \square t_{1/2}$$

$$K = 61.3 + 0.133T$$

$$E_{SSP} = -K \left[ \log(R_{mf})_{eq} / (R_w)_{eq} \right]$$

$$\phi_D = \frac{\rho_{ma} - \rho_b}{\rho_{ma} - \rho_f}$$

$$\phi = \phi_a - V_{sh} (\phi_a)_{sh}$$

$$V_{sh} = 1.7 - [3.38 - (I_{sh} + 0.7)^2]^{1/2}$$

$$I_{sh} = \frac{\gamma_{log} - \gamma_c}{\gamma_{sh} - \gamma_c}$$

$$V_{sh} = 0.33(2^{2I_{sh}} - 1)$$

$$V_{sh} = \frac{I_{sh}}{3 - 2I_{sh}}$$

$$N = N_o e^{\square t / \square}$$

$$S_w = \left( \frac{R_o}{R_l} \right)^{1/2} \quad S_o = 1 - S_w$$



